

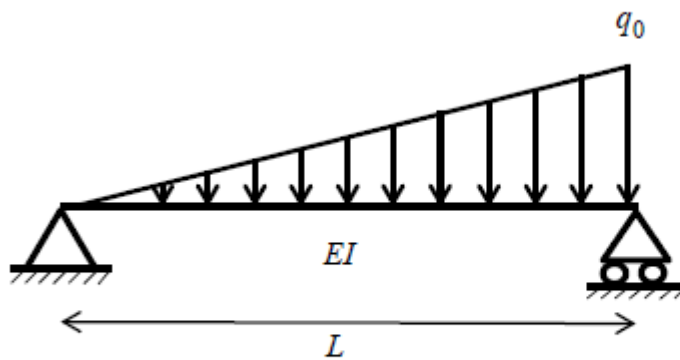
Due date: 10.21 (Mon)

주어진 문제에 대해 FBD, SFD, BMD 를 그리고 처짐 곡선 식을 유도하시오.

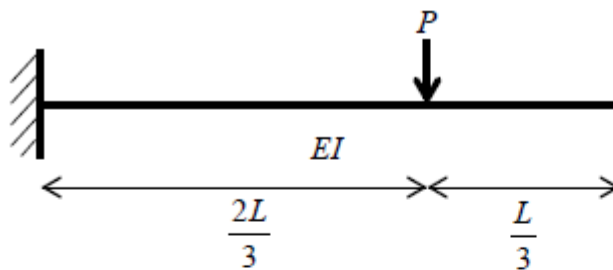
(※왼손 좌표계를 사용하시오.)

1.

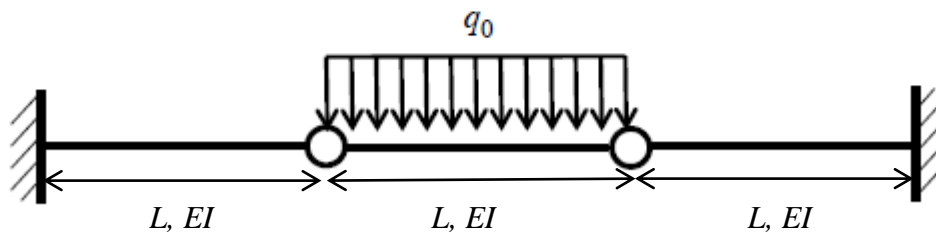
a)



b)

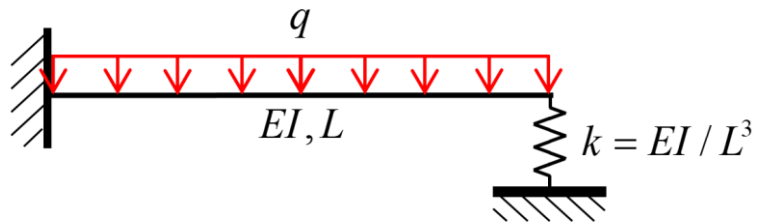


c)



Due date: 10.21 (Mon)

2.



3.

